

# REAL-WORLD PROBLEM SOLVER

ALICIA SAUNDERS JENNY ROOT DIANE BROWDER

# Math Skills Builder

## Real-World Problem Solver

**By Alicia Saunders, Jenny Root, Diane Browder**

Edited by Linda Schreiber

Illustration and Cover Design by Josh Eacret

Graphic Design by Elizabeth Ragsdale

An Attainment Company Publication

© 2017 by the Attainment Company, Inc. All rights reserved.

Printed in the United States of America.

ISBN: 978-1-57861-251-2



**Attainment Company, Inc.**

P.O. Box 930160

Verona, Wisconsin 53593-0160 USA

**1-800-327-4269**

**[www.AttainmentCompany.com](http://www.AttainmentCompany.com)**

# Contents

## Unit 1 .....1

## Unit 2 .....5

Beach .....6

Baseball Game .....12

Park .....18

## Unit 3 .....25

Department Store .....26

Museum .....32

Aquarium .....38

## Unit 4 .....45

Fast Food .....46

Zoo .....52

Lawn Chores .....58

## Unit 5 .....65

Independence Day .....66

Classroom Chores .....72

Fair .....78

## Unit 6 .....85

Art Class .....86

Hardware Store .....92

Restaurant .....98

## Unit 7 .....105

Sporting Goods Store .....106

Gas Station .....112

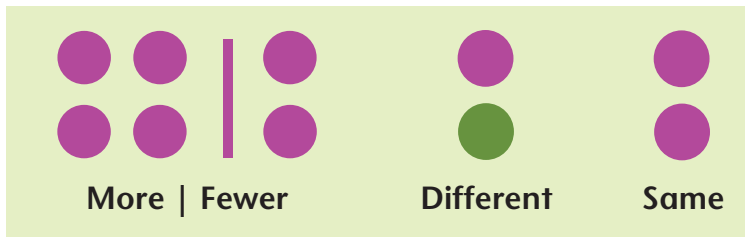
Riding a Bus .....118

## Unit 8 .....125

Chores at Home .....126

Flower Shop .....132

Airport .....138



Zoey saw blue and red seats at the baseball game.



She saw \_\_\_\_\_ blue seats.



She saw \_\_\_\_\_ red seats.

How many seats did Zoey see at the baseball game in all?

=  \_\_\_\_\_



More   Fewer	Different	Same

Henry's mom made him try on shoes at the store.



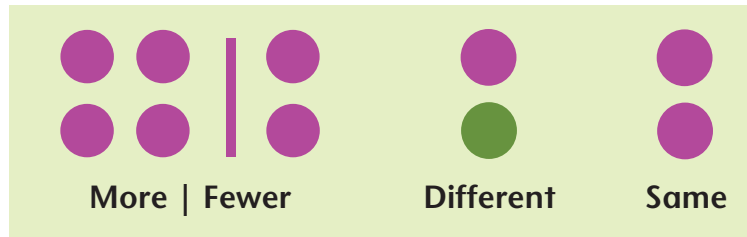
He tried on \_\_\_\_\_ pairs of running shoes.



He tried on \_\_\_\_\_ pairs of boots.

How many more pairs of running shoes than boots did Henry try on?

=



Bobby took care of many animals at the zoo.



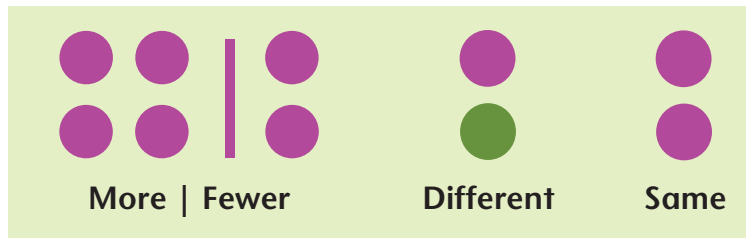
He took care of \_\_\_\_\_ monkeys.



He took care of \_\_\_\_\_ elephants.

How many fewer elephants than monkeys did Bobby take care of?

=  \_\_\_\_\_



Serena won several prizes at the fair.



She won \_\_\_\_\_ prizes.

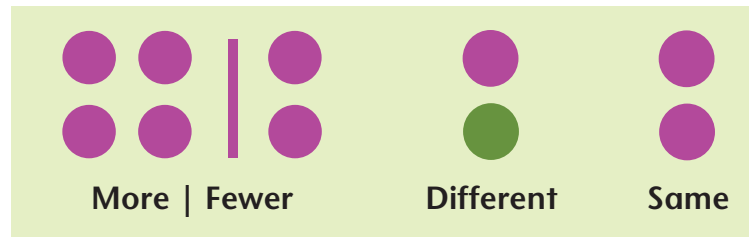


Then she won \_\_\_\_\_ more prizes.

How many prizes did Serena win altogether?

=





Michelle washed dishes at the restaurant.



She had \_\_\_\_\_ dirty dishes to wash.



She washed \_\_\_\_\_ dishes.

How many dirty dishes are left for Michelle to wash?

$$\square \bigcirc \square = \square \underline{\hspace{2cm}}$$